



**higher education
& training**

Department:
Higher Education and Training
REPUBLIC OF SOUTH AFRICA

NASIENRIGLYN

NATIONALE SERTIFIKAAT

WISKUNDE N6

28 MAART 2018

Hierdie nasienriglyn bestaan uit 15 bladsye.

VRAAG 1

$$1.1 \quad \frac{\partial z}{\partial x} = \checkmark \checkmark$$

$$\frac{\partial z}{\partial y} = xy^{x-1} \checkmark \checkmark$$

$$1.2 \quad z = \tan x \sec y$$

$$\frac{\partial z}{\partial x} = \sec^2 x \sec y \checkmark$$

$$\frac{\partial^2 z}{\partial y \partial x} = \sec^2 x \sec y \tan y \checkmark$$

$$\frac{\partial z}{\partial y} = \tan x \sec y \tan y \checkmark$$

$$\frac{\partial^2 z}{\partial x \partial y} = \sec^2 x \sec y \tan y \checkmark$$

$$\therefore \frac{\partial^2 z}{\partial y \partial x} = \frac{\partial^2 z}{\partial x \partial y}$$

$$1.3 \quad y = 2 \sin \theta \quad x = 2 \cos \theta$$

$$\frac{dy}{d\theta} = 2 \cos \theta \checkmark \quad \frac{dx}{d\theta} = -2 \sin \theta \checkmark$$

$$\frac{dy}{dx} = \frac{\frac{dy}{d\theta}}{\frac{dx}{d\theta}} = \frac{2 \cos \theta}{-2 \sin \theta} = -\cot \theta \checkmark$$

$$\text{Wanneer } x = \frac{\pi}{4} \quad \frac{dy}{dx} = -\frac{1}{\tan \frac{\pi}{4}} = \checkmark$$

(3 × 2) [6]

VRAAG 2

$$\begin{aligned}
2.1 \quad & \int \sin^4 4x dx \\
&= \int (\sin^2 4x)^2 dx \quad \checkmark \\
&= \int \left(\frac{1}{2} - \frac{1}{2} \cos 8x\right)^2 dx \quad \checkmark \quad \checkmark \\
&= \int \left(\frac{1}{4} - \frac{1}{2} \cos 8x + \frac{1}{4} \cos^2 8x\right) dx \quad \checkmark \\
&= \int \left(\frac{1}{4} - \frac{1}{2} \cos 8x + \frac{1}{4} \left(\frac{1}{2} + \frac{1}{2} \cos 16x\right)\right) dx \quad \checkmark \\
&= \int \left(\frac{1}{4} - \frac{1}{2} \cos 8x + \frac{1}{8} + \frac{1}{8} \cos 16x\right) dx \quad \checkmark \\
&= \int \left(\frac{3}{8} - \frac{1}{2} \cos 8x + \frac{1}{8} \cos 16x\right) dx \quad \checkmark \\
&= \frac{3}{8}x - \frac{1}{2} \cdot \frac{1}{8} \sin 8x + \frac{1}{8} \cdot \frac{1}{16} \sin 16x + C \quad \checkmark \quad \checkmark \quad \checkmark \\
&= \frac{3}{8}x - \frac{1}{16} \sin 8x + \frac{1}{128} \sin 16x + C
\end{aligned}$$

Of gebruik

$$\frac{1}{4} \int \cos^2 8x dx = \frac{1}{4} \left(\frac{x}{2} - \frac{\sin 16x}{32} \right)$$

$$= \frac{x}{8} - \frac{1}{128} \sin 16x$$

(5)

$$\begin{aligned}
2.2 \quad & \int \frac{\cos 3x}{e^{2x}} dx \\
& \int e^{-2x} \cos 3x dx \quad f(x) = e^{-2x} \quad g'(x) = \cos 3x \\
&= e^{-2x} \frac{\sin 3x}{3} - \int -2e^{-2x} \frac{\sin 3x}{3} dx \\
&= e^{-2x} \frac{\sin 3x}{3} + \frac{2}{3} \int e^{-2x} \sin 3x dx \quad f(x) = e^{-2x} \quad g'(x) = \sin 3x \\
&= e^{-2x} \frac{\sin 3x}{3} + \frac{2}{3} \left[e^{-2x} \cdot -\frac{\cos 3x}{3} - \int -2e^{-2x} \cdot -\frac{\cos 3x}{3} dx \right] \\
&= e^{-2x} \frac{\sin 3x}{3} - \frac{2}{9} \cos 3x - \frac{4}{9} \int e^{-2x} \cos 3x dx \quad \checkmark \\
\therefore \int e^{-2x} \cos 3x dx + \frac{4}{9} \int e^{-2x} \cos 3x dx &= \frac{1}{3} e^{-2x} \sin 3x - \frac{2}{9} e^{-2x} \cos 3x \quad \checkmark \checkmark \\
\frac{13}{9} \int e^{-2x} \cos 3x dx &= \frac{1}{3} e^{-2x} \sin 3x - \frac{2}{9} e^{-2x} \cos 3x \\
\int e^{-2x} \cos 3x dx &= \frac{9}{13} \left[\frac{1}{3} e^{-2x} \sin 3x - \frac{2}{9} e^{-2x} \cos 3x \right] + C \quad \checkmark \\
\text{or} &= \frac{e^{-2x}}{13} (3 \sin 3x - 2 \cos 3x) + C \\
\text{Alternatief vir 2.2 : Begin met } f(x) &= \cos 3x \quad \text{en } g'(x) = e^{-2x}
\end{aligned}$$

(5)

$$\begin{aligned}
2.3 \quad & \int \tan^3 5x(\sec^2 5x - 1)dx \\
& \int (\tan^3 5x \sec^2 5x - \tan^3 5x)dx \quad \checkmark \\
& \quad \checkmark \\
& \int (\tan^3 5x \sec^2 5x - \tan 5x \tan^2 5x)dx \\
& \int (\tan^3 5x \sec^2 5x - \tan 5x(\sec^2 5x - 1))dx \quad \checkmark \\
& \quad \checkmark \\
& \int (\tan^3 5x \sec^2 5x - \tan 5x \sec^2 5x + \tan 5x)dx \\
& \quad \checkmark \quad \checkmark \quad \checkmark \\
& \frac{1}{5} \frac{\tan^4 5x}{4} - \frac{1}{5} \frac{\tan^2 5x}{2} + \frac{1}{5} \ln(\sec 5x) + C \quad (4)
\end{aligned}$$

$$\begin{aligned}
2.4 \quad & \int \frac{1}{\sqrt{1+3x-x^2}} dx \\
& -x^2 + 3x + 1 \\
& = -[x^2 - 3x - 1] \quad \checkmark \\
& \quad \checkmark \quad \checkmark \\
& = -\left[\left\{ x^2 - 3x + \left(\frac{3}{2}\right)^2 \right\} - \left(\frac{3}{2}\right)^2 - 1 \right] \\
& = -\left[\left(x - \frac{3}{2}\right)^2 - \frac{13}{4} \right] \quad \checkmark \\
& = \frac{13}{4} - \left(x - \frac{3}{2}\right)^2 \quad \checkmark
\end{aligned}$$

$$\int \frac{1}{\sqrt{\frac{13}{4} - \left(x - \frac{3}{2}\right)^2}} dx \quad \checkmark$$

$$\frac{1}{b^2} \sin^{-1} \frac{bx}{a} + C$$

$$= \frac{1}{1} \sin^{-1} \frac{1 \left(x - \frac{3}{2}\right)}{\sqrt{\frac{13}{4}}} + C \quad \checkmark$$

$$= \sin^{-1} \frac{2 \left(x - \frac{3}{2}\right)}{\sqrt{13}} + C$$

$$= \sin^{-1} \frac{(2x-3)}{\sqrt{13}} + C$$

Of gebruik die formule $ax^2 + bx + c = \frac{4ac - b^2}{4a} + a \left(x + \frac{b}{2a}\right)^2$

$$-x^2 + 3x + 1$$

$$= \frac{4(-1)1 - (3)^2}{4(-1)} + (-1) \left(x + \frac{3}{2 \cdot (-1)}\right)^2 \quad \checkmark$$

$$= \frac{-4 - 9}{-4} - \left(x - \frac{3}{2}\right)^2 \quad \checkmark$$

$$= \frac{13}{4} - \left(x - \frac{3}{2}\right)^2 \quad \checkmark$$

(4)
[18]

VRAAG 3

3.1

$$\int \frac{(x+3)(x+4)}{(x+1)(x-2)} dx$$

gebruik lang deling

$$\frac{(x+3)(x+4)}{(x+1)(x-2)} = \frac{x^2 + 7x + 12}{x^2 - x - 2} = 1 + \frac{8x + 14}{(x+1)(x-2)}$$

$$\frac{8x + 14}{(x+1)(x-2)} = \frac{A}{x+1} + \frac{B}{x-2}$$

$$8x + 14 = A(x-2) + B(x+1)$$

$$x = 2 \quad 8(2) + 14 = 0 + B(2+1) \quad B = 10$$

$$x = -1 \quad 8(-1) + 14 = A(-1-2) \quad A = -2$$

$$\begin{aligned} \therefore \int \frac{(x+3)(x+4)}{(x+1)(x-2)} dx &= \int 1 + \frac{8x+14}{(x+1)(x-2)} dx \\ &= \int 1 + \frac{-2}{x+1} + \frac{10}{x-2} dx \\ &= x - 2 \ln(x+1) + 10 \ln(x-2) + C \end{aligned}$$

Alternatief 3.1 (Nota : Aangesien die noemer en teller van tweede graad met koëffisiënt 1 is, sal die koëffisiënt 1 wees en die res sal lineêr wees. Die rationale breuke verkry kan sonder langdeling in parsieële breuke opgelos word. Daarvolgens kan die volgende aanvaar word)

$$\begin{aligned} \frac{(x+3)(x+4)}{(x+1)(x-2)} &= 1 + \frac{A}{x+1} + \frac{B}{x-2} \\ (x+3)(x+4) &= 1(x+1)(x-2) + A(x-2) + B(x+1) \\ x = -1 \quad (-1+3)(-1+4) &= +A(-1-2) \quad A = -2 \\ x = 2 \quad (2+3)(2+4) &= 1B(2+1) \quad B = 10 \end{aligned}$$

$$\begin{aligned} \therefore \int \frac{(x+3)(x+4)}{(x+1)(x-2)} dx &= \int 1 + \frac{-2}{x+1} + \frac{10}{x-2} dx \\ &= x - 2 \ln(x+1) + 10 \ln(x-2) + C \end{aligned} \quad (6)$$

$$3.2 \quad \frac{3x^2 - 2x - 4}{(2x^2 + 1)(x - 1)} = \frac{Ax + B}{2x^2 + 1} + \frac{C}{x - 1}$$

$$3x^2 - 2x - 4 = (Ax + B)(x - 1) + C(2x^2 + 1) \quad \checkmark$$

$$x = 1 \quad 3 - 2 - 4 = C(2 + 1) \quad C = -1 \quad \checkmark$$

$$3x^2 - 2x - 4 = Ax^2 + Bx - Ax - B + 2Cx^2 + C$$

$$x^2: A + 2C = 3 \quad \therefore A - 2 = 3 \quad A = 5 \quad \checkmark$$

$$x: B - A = -2 \quad \therefore B = A - 2 = 5 - 2 = 3 \quad B = 3 \quad \checkmark$$

$$\int \frac{3x^2 - 2x - 4}{(2x^2 + 1)(x - 1)} dx = \int \frac{5x + 3}{2x^2 + 1} dx + \int \frac{-1}{x - 1} dx \quad \checkmark$$

$$= \int \frac{5x}{2x^2 + 1} dx + \int \frac{3}{2x^2 + 1} dx + \int \frac{-1}{x - 1} dx \quad \checkmark$$

$$= \frac{5}{4} \ln(2x^2 + 1) + \frac{3}{\sqrt{2}} \tan^{-1}(\sqrt{2}x) - \ln(x - 1) + C \quad \checkmark$$

(6)
[12]

VRAAG 4

$$4.1 \quad x \frac{dy}{dx} + 2y = xe^x$$

$$\frac{dy}{dx} + 2 \frac{y}{x} = e^x \quad \checkmark$$

$$e^{\int p dx} = e^{\int \frac{2}{x} dx} = e^{2 \ln x} = e^{\ln x^2} = x^2 \quad \checkmark \quad \checkmark \quad \checkmark \quad \checkmark$$

$$\int Q e^{\int p dx} dx = \int e^x x^2 dx$$

$$= x^2 e^x - \int 2x e^x dx \quad \checkmark$$

$$= x^2 e^x - \left[2x e^x - \int 2e^x dx \right]$$

$$= x^2 e^x - 2x e^x + 2e^x \quad \checkmark$$

$$yx^2 = x^2 e^x - 2x e^x + 2e^x + C \quad \checkmark$$

(5)

4.2 $\frac{d^2y}{dx^2} + 4\frac{dy}{dx} - 5y = 2e^x$
 $r^2 + 4r - 5 = 0 \quad \checkmark$
 $(r + 5)(r - 1) = 0$

$r = -5 \quad r = 1$
 $y_c = Ae^{-5x} + Be^x \quad \checkmark$
 $y = Cxe^x \quad \checkmark$

$\frac{dy}{dx} = Cxe^x + Ce^x \quad \checkmark$
 $\frac{d^2y}{dx^2} = Cxe^x + Ce^x + Ce^x$
 $= Cxe^x + 2Ce^x \quad \checkmark$

$\therefore Cxe^x + 2Ce^x + 4(Cxe^x + Ce^x) - 5Cxe^x = 2e^x \quad \checkmark$

$Cxe^x + 2Ce^x + 4Cxe^x + 4Ce^x - 5Cxe^x = 2e^x$

$6Ce^x = 2e^x \quad \therefore C = \frac{1}{3} \quad \checkmark$

$y_p = \frac{1}{3}xe^x$

$y = y_c + y_p$

$y = Ae^{-5x} + Be^x + \frac{1}{3}xe^x \quad \checkmark$

$x = 0 \text{ and } y = 1 \quad 1 = A + B \dots\dots\dots(1)$

$\frac{dy}{dx} = -5Ae^{-5x} + Be^x + \frac{1}{3}xe^x + \frac{1}{3}e^x \quad \checkmark$

$x = 0 \text{ and } \frac{dy}{dx} = 0 \quad 0 = -5A + B + \frac{1}{3} \quad 5A - B = \frac{1}{3} \dots\dots\dots(2)$

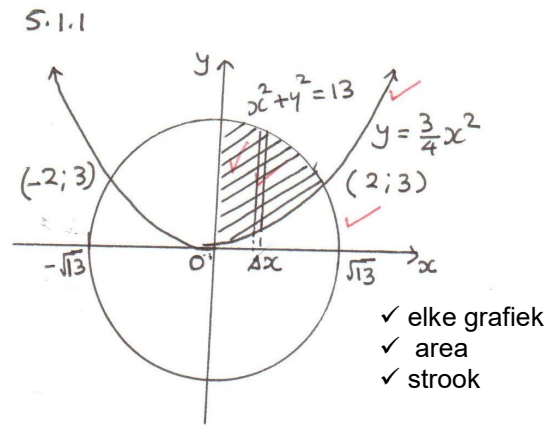
$(2) + (1) \quad 6A = \frac{4}{3} \quad A = \frac{2}{9} \quad \checkmark \quad \therefore B = 1 - A = \frac{7}{9} \quad \checkmark$

$y = \frac{2}{9}e^{-5x} + \frac{7}{9}e^x + \frac{1}{3}xe^x \quad \checkmark$

or $y = Ae^x + Be^{-5x}$
 Also $y = 2Cxe^x$ wat sal
 gee $C = \frac{1}{6}$ Daarvolgens
 $y_p = 2Cxe^x = 2 \cdot \frac{1}{6}xe^x = \frac{1}{3}xe^x$

(7)
[12]

5.1 5.1.1



(2)

5.1.2

$$A = \int_a^b y_1 - y_2 \, dx$$

$$= \int_0^{\sqrt{13}} \sqrt{13 - x^2} - \frac{3}{4}x^2 \, dx$$

$$= \left[\frac{13}{2} \sin^{-1} \frac{x}{\sqrt{13}} + \frac{x}{2} \sqrt{13 - x^2} - \frac{3}{4} \frac{x^3}{3} \right]_0^{\sqrt{13}}$$

$$= \frac{13}{2} \sin^{-1} \frac{2}{\sqrt{13}} + \frac{2}{2} \sqrt{13 - 2^2} - \frac{3}{4} \frac{2^3}{3} - 0$$

$$= 4,822 \text{ units}^2$$

$$y = 4x - x^2 \qquad y = x$$

$$\therefore x = 4x - x^2$$

$$x^2 - 3x = 0$$

$$x(x - 3) = 0$$

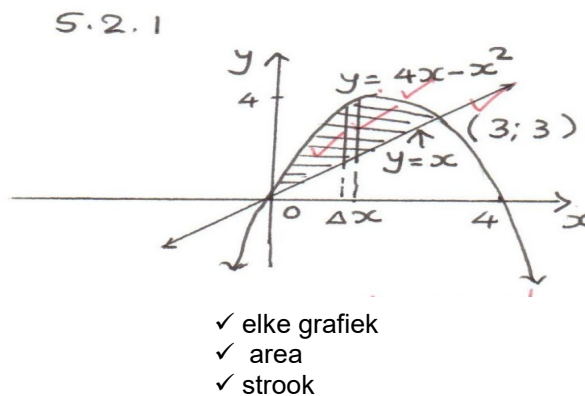
$$x = 0 \quad x = 3$$

$$y = 0 \quad y = 3$$

$(0; 0) \quad (3; 3)$

(4)

5.2 5.2.1

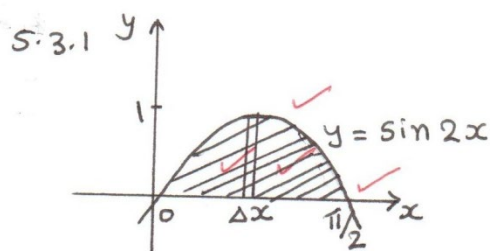


$$\begin{aligned}
 V_x &= \pi \int_a^b y_1^2 - y_2^2 dx \\
 &= \pi \int_0^3 (4x - x^2)^2 - x^2 dx \\
 &= \pi \int_0^3 16x^2 - 8x^3 + x^4 - x^2 dx \\
 &= \pi \int_0^3 15x^2 - 8x^3 + x^4 dx \\
 &= \pi \left[\frac{15x^3}{3} - \frac{8x^4}{4} + \frac{x^5}{5} \right]_0^3 \\
 &= \pi \left[5(3)^3 - 2(3)^4 + \frac{(3)^5}{5} - 0 \right] \\
 &= 21,6\pi = 21\frac{3}{5}\pi = \frac{08}{5}\pi \\
 &= 67,858\text{units}^3
 \end{aligned}
 \tag{3}$$

$$\begin{aligned}
 V_{m-y} &= \int_a^b r dv \\
 &= \int_a^b x 2\pi \left(\frac{y_1 + y_2}{2} \right) (y_1 - y_2) dv \\
 &= \pi \int_a^b x (y_1^2 - y_2^2) dx \\
 &= \pi \int_0^3 x (15x^2 - 8x^3 + x^4) dx \quad \text{note: } y_1^2 - y_2^2 \text{ from 5.2.2} \\
 &= \pi \int_0^3 (15x^3 - 8x^4 + x^5) dx \\
 &= \pi \left[\frac{15x^4}{4} - \frac{8x^5}{5} + \frac{x^6}{6} \right]_0^3 \\
 &= \pi \left[\frac{15(3)^4}{4} - \frac{8(3)^5}{5} + \frac{(3)^6}{6} - 0 \right] \\
 &= \pi 36,45\text{units}^4 = \pi \frac{729}{20}\text{units}^4 = \pi 39\frac{9}{20}\text{units}^4 \\
 &= 114,511\text{units}^4 \\
 \frac{-}{x} &= \frac{\pi 36,45\text{units}}{21,6\pi\text{units}^3} = 1,688\text{units}
 \end{aligned}
 \tag{4}$$

1 regmerk vir elke stap of 3 regmerke indien slegs hierdie laaste stap

5.3 5.3.1



- ✓ vorm
- ✓ x snypunt
- ✓ stoip

(2)

$$\begin{aligned}
 A &= \int_0^{\frac{\pi}{2}} \sin 2x dx \quad \checkmark \\
 &= \left[-\frac{\cos 2x}{2} \right]_0^{\frac{\pi}{2}} \quad \checkmark \\
 &= -\frac{\cos 2\frac{\pi}{2}}{2} - \left(-\frac{\cos 2(0)}{2} \right) \quad \checkmark \quad \checkmark \\
 &= 1 \text{ units}^2 \quad \checkmark
 \end{aligned}$$

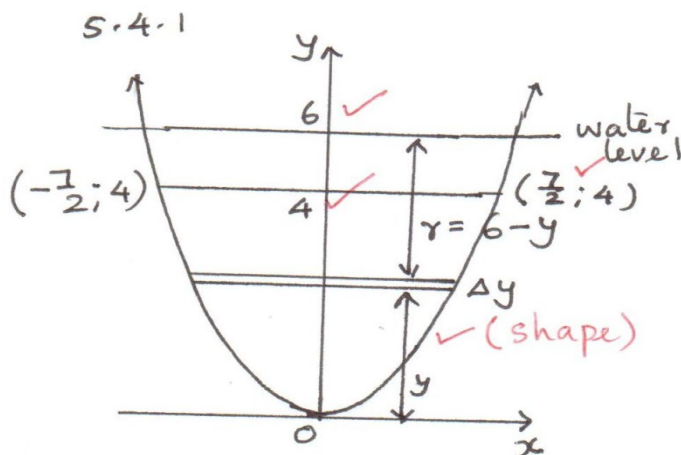
5.3.2

$$\begin{aligned}
 I_x &= \int_a^b r^2 dA \\
 I_x &= \int_0^{\frac{\pi}{2}} x^2 \sin 2x dx \quad \checkmark \quad \checkmark \quad \checkmark \\
 &= \left[x^2 \left(-\frac{1}{2} \cos 2x \right) - \int 2x \left(-\frac{1}{2} \cos 2x \right) dx \right]_0^{\frac{\pi}{2}} \\
 &= \left[-\frac{1}{2} x^2 \cos 2x + \int x \cos 2x dx \right]_0^{\frac{\pi}{2}} \quad \checkmark
 \end{aligned} \tag{3}$$

5.3.3

$$\begin{aligned}
 &= \left[-\frac{1}{2} x^2 \cos 2x + \left\{ x \frac{1}{2} \sin 2x - \int \frac{1}{2} \sin 2x \right\} \right]_0^{\frac{\pi}{2}} \quad \checkmark \quad \checkmark \\
 &= \left[-\frac{1}{2} x^2 \cos 2x + \left\{ x \frac{1}{2} \sin 2x + \frac{1}{4} \cos 2x \right\} \right]_0^{\frac{\pi}{2}} \quad \checkmark \\
 &= -\frac{1}{2} \left(\frac{\pi}{2} \right)^2 \cos 2 \left(\frac{\pi}{2} \right) + \left\{ \left(\frac{\pi}{2} \right) \frac{1}{2} \sin 2 \left(\frac{\pi}{2} \right) + \frac{1}{4} \cos 2 \left(\frac{\pi}{2} \right) \right\} - \left\{ 0 + 0 + \frac{1}{4} \right\} \quad \checkmark \\
 &= 0,7337 \text{ units}^4 \quad \checkmark
 \end{aligned} \tag{5}$$

5.4.1



$$y = ax^2 \quad \checkmark \quad 4 = a\left(\frac{7}{2}\right)^2 \quad \checkmark \quad 4 = a\left(\frac{49}{4}\right)$$

$$a = \frac{16}{49} \quad \checkmark$$

$$\therefore y = \frac{16}{49}x^2 \quad x^2 = \frac{49}{16}y \quad x = \frac{7}{4}y^{\frac{1}{2}} \quad \checkmark$$

$$\text{Eerste moment van area} = \int_a^b r dA = \int_0^4 (6-y) 2x dy$$

$$= \int_0^4 (6-y) 2 \cdot \frac{7}{4} y^{\frac{1}{2}} dy \quad \checkmark$$

$$= \frac{7}{2} \int_0^4 (6-y) y^{\frac{1}{2}} dy$$

$$= \frac{7}{2} \int_0^4 \left(6y^{\frac{1}{2}} - y^{\frac{3}{2}} \right) dy \quad \checkmark$$

$$= \frac{7}{2} \left[\frac{6y^{\frac{3}{2}}}{\frac{3}{2}} - \frac{y^{\frac{5}{2}}}{\frac{5}{2}} \right]_0^4$$

$$= \frac{7}{2} \left[4y^{\frac{3}{2}} - \frac{2}{5}y^{\frac{5}{2}} \right]_0^4 \quad \checkmark$$

$$= \frac{7}{2} \left[4(4)^{\frac{3}{2}} - \frac{2}{5}(4)^{\frac{5}{2}} - 0 \right] \quad \checkmark = 67,2m^3 \quad \checkmark$$

Tweede moment=

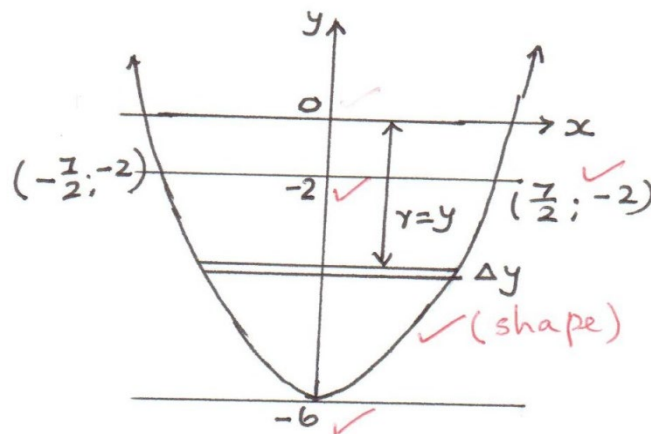
$$\int_a^b r^2 dA = \int_0^4 (6-y)^2 2 \cdot \frac{7}{4} y^{\frac{1}{2}} dy \quad \checkmark \quad \checkmark \quad \checkmark$$

$$= \frac{7}{2} \int_0^4 (36 - 12y + y^2) \cdot y^{\frac{1}{2}} dy \quad \checkmark$$

$$= \frac{7}{2} \int_0^4 (36y^{\frac{1}{2}} - 12y^{\frac{3}{2}} + y^{\frac{5}{2}}) dy \quad \checkmark$$

$$\begin{aligned}
 &= \frac{7}{2} \left[36y^{\frac{3}{2}} \frac{2}{3} - 12y^{\frac{5}{2}} \frac{2}{5} + y^{\frac{7}{2}} \frac{2}{7} \right]_0^4 \quad \checkmark \\
 &= \frac{7}{2} \left[36(4)^{\frac{3}{2}} \frac{2}{3} - 12(4)^{\frac{5}{2}} \frac{2}{5} + (4)^{\frac{7}{2}} \frac{2}{7} - 0 \right] \quad \checkmark \\
 &= \frac{7}{2} \left[24(4)^{\frac{3}{2}} - \frac{24}{5}(4)^{\frac{5}{2}} + (4)^{\frac{7}{2}} \frac{2}{7} - 0 \right] \\
 &= 262,4m^4 \quad \checkmark \\
 &= \frac{262,4}{67,2}m \quad \checkmark \\
 &= 3,905 \text{ m}
 \end{aligned}$$

s.4.1 (alternative)



$$y = ax^2 - 6 \quad \checkmark$$

$$-2 = a \left(\frac{7}{2} \right)^2 - 6 \quad \checkmark \quad a = \frac{16}{49} \quad \checkmark$$

$$y = \frac{16}{49}x^2 - 6 \quad x^2 = \frac{49}{16}(y+6) \quad x = \frac{7}{4}(y+6)^{\frac{1}{2}} \quad \checkmark$$

(4)

5.4.2

(Alternatief)*First moment*

$$\begin{aligned}
&= \int_{-6}^{-2} y^2 \left\{ \frac{7}{4} (y+6)^{\frac{1}{2}} \right\} dy \quad \checkmark \quad \checkmark \\
&= \frac{7}{2} \int_{-6}^{-2} y (y+6)^{\frac{1}{2}} dy \quad u = y+6 \quad y = u-6 \quad dy = du \\
&\quad \quad \quad y = -2 \text{ then } u = 4 \text{ and } y = -6 \text{ then } u = 0 \\
&= \frac{7}{2} \int_0^4 (u-6) u^{\frac{1}{2}} du \quad \checkmark \\
&= \frac{7}{2} \int_0^4 \left(u^{\frac{3}{2}} - 6u^{\frac{1}{2}} \right) du \quad \checkmark \\
&= \frac{7}{2} \left[\frac{2}{5} u^{\frac{5}{2}} - 6 \frac{2}{3} u^{\frac{3}{2}} \right]_0^4 = \frac{7}{2} \left[0 - \left\{ \frac{2}{5} (4)^{\frac{5}{2}} - 4 (4)^{\frac{3}{2}} \right\} \right] \quad \checkmark \\
&= -67,2 \text{ m}^3 \quad \checkmark
\end{aligned}$$

(3)

5.4.3

Tweede moment (Alternatief)

$$\begin{aligned}
&= \int_a^b r^2 dA \\
&= \int_{-6}^{-2} y^2 2 \left\{ \frac{7}{4} (y+6)^{\frac{1}{2}} \right\} dy \quad \checkmark \quad \checkmark \quad u = y+6 \quad y = u-6 \quad dy = du \\
&\quad \quad \quad y = -2 \text{ then } u = 4 \text{ and } y = -6 \text{ then } u = 0 \\
&= \frac{7}{2} \int_0^4 (u-6)^2 u^{\frac{1}{2}} du \quad \checkmark \\
&= \frac{7}{2} \int_0^4 (u^2 - 12u + 36) u^{\frac{1}{2}} du \quad \checkmark \\
&= \frac{7}{2} \int_0^4 \left(u^{\frac{5}{2}} - 12u^{\frac{3}{2}} + 36u^{\frac{1}{2}} \right) du \quad \checkmark \\
&= \frac{7}{2} \left[\left(\frac{2}{7} u^{\frac{7}{2}} - 12u^{\frac{5}{2}} \frac{2}{5} + 36u^{\frac{3}{2}} \frac{2}{3} \right) \right]_0^4 \quad \checkmark \\
&= \frac{7}{2} \left[0 - \left\{ \frac{2}{7} (4)^{\frac{7}{2}} - 12 (4)^{\frac{5}{2}} \frac{2}{5} + 36 (4)^{\frac{3}{2}} \frac{2}{3} \right\} \right] \quad \checkmark \\
&\quad \quad \quad = 262,4 \text{ m}^4 \quad \checkmark \\
&= \frac{262,4}{-67,2} = -3,905 \text{ m} \quad \checkmark
\end{aligned}$$

(5)
[40]

VRAAG 6

6.1 $y = \ln(\sec x)$

$$\frac{dy}{dx} = \frac{1}{\sec x} \sec x \tan x = \tan x$$

$$\left(\frac{dy}{dx}\right)^2 = (\tan x)^2$$

$$S = \int_a^b \sqrt{1 + \left(\frac{dy}{dx}\right)^2}$$

$$= \int_0^{\frac{\pi}{3}} \sqrt{1 + \tan^2 x} dx$$

$$= \int_0^{\frac{\pi}{3}} \sqrt{\sec^2 x} dx$$

$$= \int_0^{\frac{\pi}{3}} \sec x dx$$

$$= \left[\ln(\sec x + \tan x) \right]_0^{\frac{\pi}{3}}$$

$$= \ln\left(\sec \frac{\pi}{3} + \tan \frac{\pi}{3}\right) - \ln(\sec 0 + \tan 0)$$

$$= 1,317 \text{ units}$$

(6)

6.2 $x = 2 \cos \theta$ $y = 2 \sin \theta$

$$\frac{dx}{d\theta} = -2 \sin \theta$$

$$\frac{dy}{d\theta} = 2 \cos \theta$$

$$\left(\frac{dx}{d\theta}\right)^2 = 4 \sin^2 \theta$$

$$\left(\frac{dy}{d\theta}\right)^2 = 4 \cos^2 \theta$$

$$\left(\frac{dx}{d\theta}\right)^2 + \left(\frac{dy}{d\theta}\right)^2 = 4 \sin^2 \theta + 4 \cos^2 \theta$$

$$= 4(1) = 4$$

$$A_y = 2\pi \int_{\theta_1}^{\theta_2} x \sqrt{\left(\frac{dx}{d\theta}\right)^2 + \left(\frac{dy}{d\theta}\right)^2} d\theta$$

$$= 2\pi \int_0^{\frac{\pi}{2}} 2 \cos \theta \sqrt{4} d\theta$$

$$= 8\pi \left[\sin \theta \right]_0^{\frac{\pi}{2}}$$

$$= 8\pi \left[\sin \frac{\pi}{2} - \sin 0 \right]$$

$$= 8\pi = 25,133 \text{ units}^2$$

(6)

[12]

TOTAAL: 100